







# verliefde harten

Weet je het nog? De verliefde harten helpen jou bij het splitsen met sommen tot 10. Er zijn 6 verliefde stelletjes. Kan jij ze hieronder invullen?



## Oefen de sommen hieronder

$6 + \dots = 10$

$8 + \dots = 10$

$7 + \dots = 10$

$1 + \dots = 10$

$3 + \dots = 10$

$4 + \dots = 10$

$5 + \dots = 10$

$9 + \dots = 10$

$10 + \dots = 10$

$0 + \dots = 10$

$1 + \dots = 10$

$3 + \dots = 10$

$2 + \dots = 10$

$8 + \dots = 10$

$4 + \dots = 10$

$5 + \dots = 10$

$0 + \dots = 10$

$6 + \dots = 10$

$7 + \dots = 10$

$2 + \dots = 10$

$10 - 6 = \dots$

$10 - 4 = \dots$

$10 - 1 = \dots$

$10 - 5 = \dots$

$10 - 8 = \dots$

$10 - 5 = \dots$

$10 - 3 = \dots$

$10 - 0 = \dots$

$10 - 7 = \dots$

$10 - 9 = \dots$

$10 - 2 = \dots$

$10 - 6 = \dots$

$10 - 1 = \dots$

$10 - 10 = \dots$

$10 - 8 = \dots$

$10 - 7 = \dots$

$10 - 3 = \dots$

$10 - 0 = \dots$

$10 - 4 = \dots$

$10 - 2 = \dots$