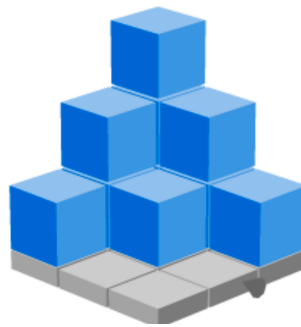


# rekencircuit

Weekspel: blokken bouwen



1	2	3
0	1	2
0	0	1

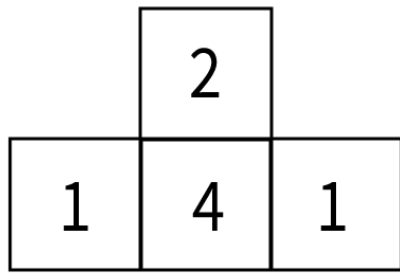
## Uitleg

Je kiest een van de plattegronden. In elk vakje staat een getal. Aan dit getal kun je zien hoeveel blokjes je op elkaar moet bouwen. Je bouwt het gebouw met behulp van de plattegrond.

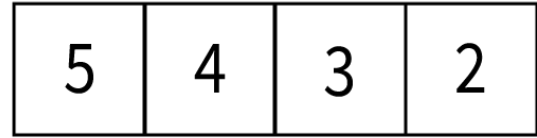
## Nodig

- Plattegrond
- Vierkante blokjes

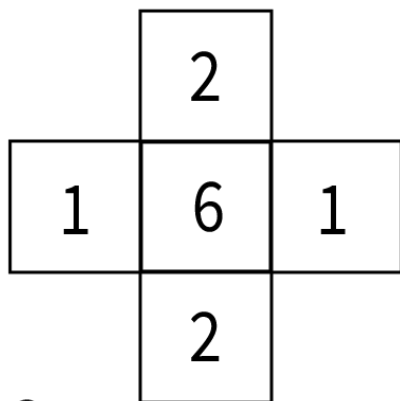
Groep 3



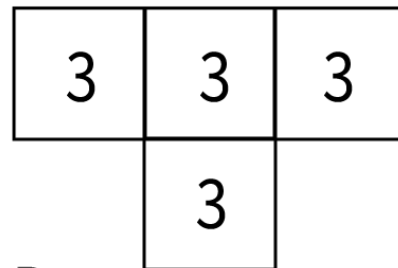
A



B

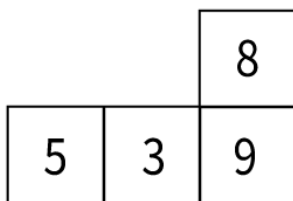


C

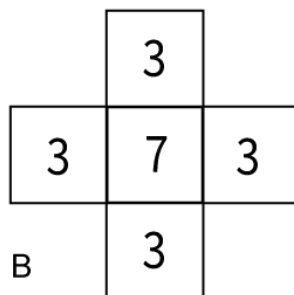


D

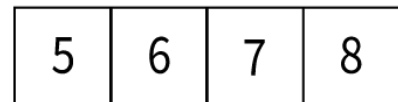
Groep 4



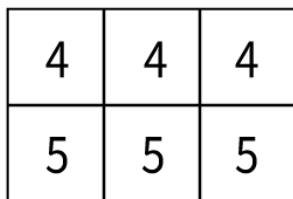
A



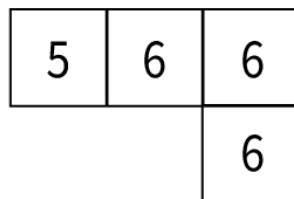
B



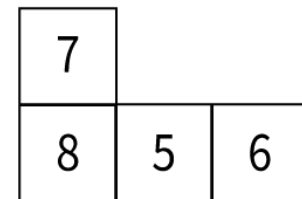
C



D



E



F